


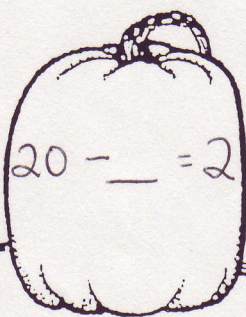
Name : \_\_\_\_\_ Date : \_\_\_\_\_

Find the missing number in each of the pumpkins.


Match the missing numbers to the letters on the back to find the secret message.




$30 - \underline{\quad} = 10$



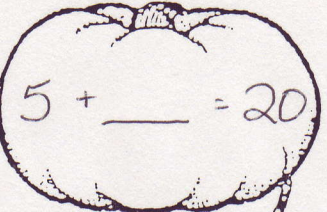
$20 - \underline{\quad} = 2$




$10 + \underline{\quad} = 19$




$6 - \underline{\quad} = 3$




$5 + \underline{\quad} = 20$




$12 - \underline{\quad} = 1$




$7 + \underline{\quad} = 25$




$22 - \underline{\quad} = 2$




$30 - \underline{\quad} = 12$




$5 + \underline{\quad} = 10$



$30 - \underline{\quad} = 3$



$20 - \underline{\quad} = 0$



$7 - \underline{\quad} = 6$